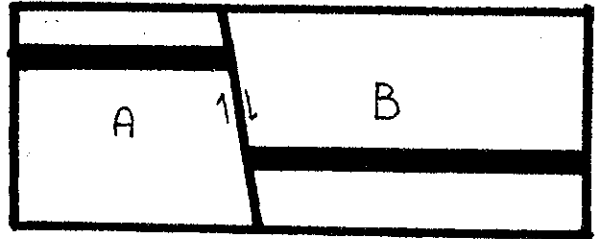


Part 2: Examine the following faults and label the parts. Note that these are all SIDE views!!!!

Foot wall: \_\_\_\_\_

Hanging wall: \_\_\_\_\_


Type of fault: \_\_\_\_\_



Foot wall: \_\_\_\_\_

Hanging wall: \_\_\_\_\_

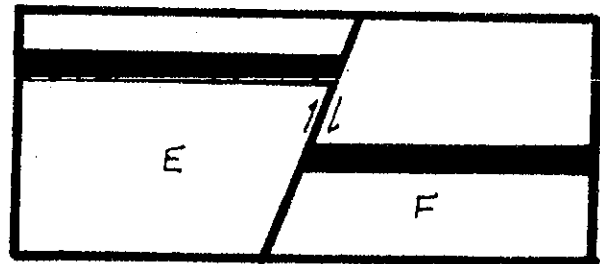
Type of fault: \_\_\_\_\_



Foot wall: \_\_\_\_\_

Hanging wall: \_\_\_\_\_


Type of fault: \_\_\_\_\_




Foot wall: \_\_\_\_\_

Hanging wall: \_\_\_\_\_

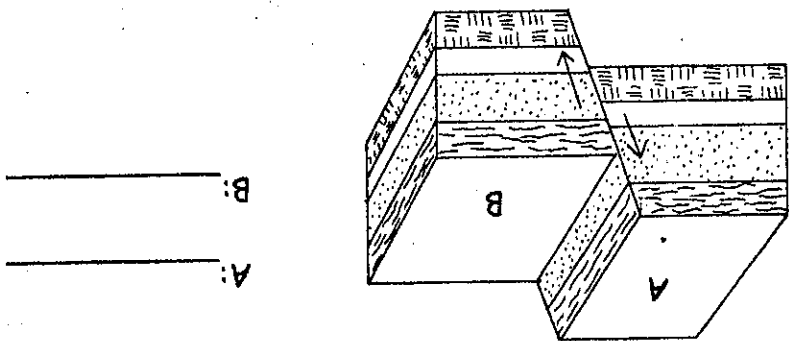
Type of fault: \_\_\_\_\_





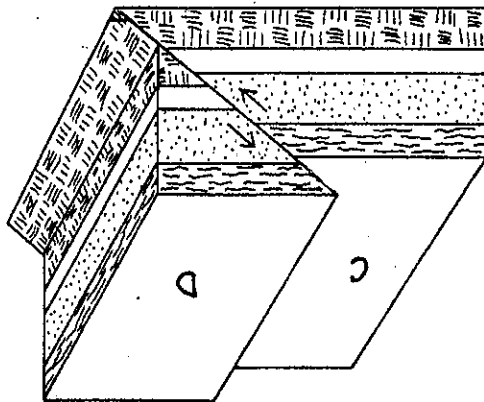
name \_\_\_\_\_

Part 1: Examine the three faults below. Label each part and fault.



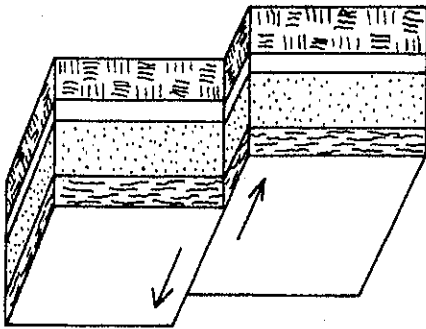
A: \_\_\_\_\_  
B: \_\_\_\_\_

Type of fault: \_\_\_\_\_



C: \_\_\_\_\_  
D: \_\_\_\_\_

Type of fault: \_\_\_\_\_



Type of fault: \_\_\_\_\_